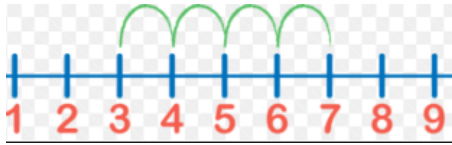


## Addition Using a Number Line

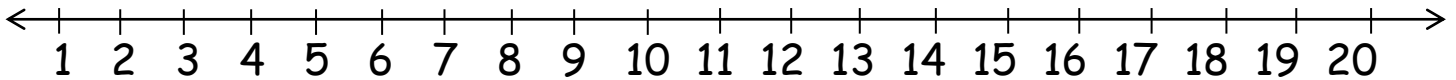


Look at the calculation to see if it is an addition or subtraction. Ask the children to draw the correct number of hops i.e.  $6 + 2 =$

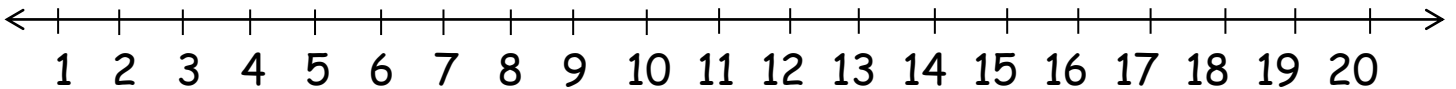
start on 6 and draw 2 hops forwards or for  $10 - 3 =$  start on 10 and draw 3 hops backwards.



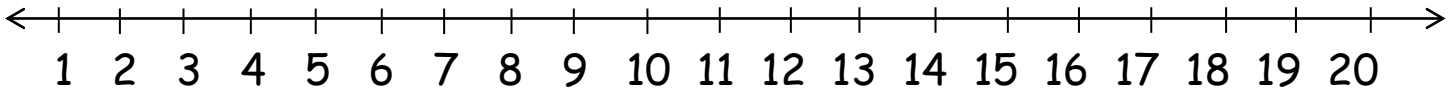
$$6 + 2 = \underline{\quad}$$



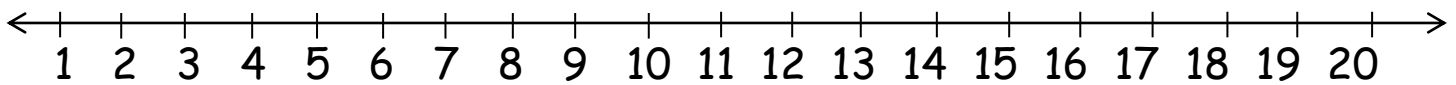
$$10 - 3 = \underline{\quad}$$



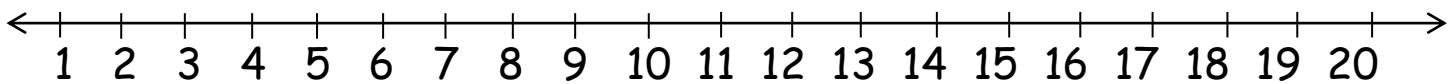
$$8 + 2 = \underline{\quad}$$



$$9 - 3 = \underline{\quad}$$



$$12 + 4 = \underline{\quad}$$



$$16 - 3 = \underline{\quad}$$

